


5.  Écris la syllabe que tu  entends.



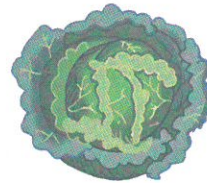
--	--



--	--	--



--	--






--



--	--

--	--	--	--	--

6.  Dessine un rond pour chaque son et  coche le rond du son **ou**.



7.  Colorie les mots qui correspondent au dessin.

souris

souffre

La

lèche toute la

sourire

soupe



8.  Écris le mot qui convient : *sur* ou *sous*.



--	--	--	--

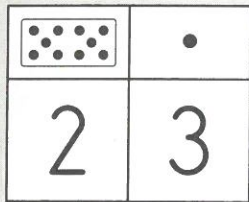
9.  Écris une phrase avec le mot : *tout*.

--	--	--	--	--	--	--	--	--	--

24 Lire et écrire les nombres de 20 à 29

✓ J'écris les nombres de 20 à 29 de différentes manières.

23


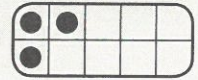




23, c'est 23 unités

23, c'est 2 dizaines et 3 unités


$$23 = 10 + 10 + 3$$

$$23 = 20 + 3$$




Complète.

1




20

$$10 + 10$$




.....

$$10 + 10 + \dots$$




.....

$$10 + 10 + \dots$$



.....

$$10 + 10 + \dots$$




.....

$$10 + 10 + \dots$$



.....

$$10 + 10 + \dots$$




.....

$$10 + 10 + \dots$$



.....

$$10 + 10 + \dots$$



.....



$$\dots + \dots + 8$$



.....


$$10 + \dots + \dots$$

Corrige l'erreur dans le tableau de droite.



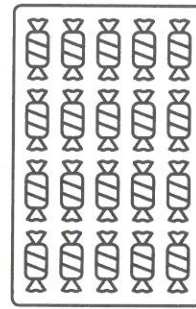



Colorie ce qui fait 25.

2



$$10 + 5 + 10$$

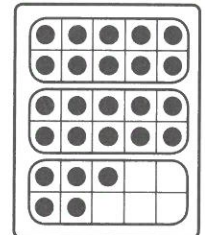
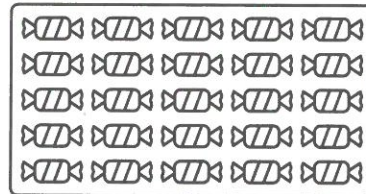


$$20 + 5$$

2 dizaines et 5 unités

$$10 + 20 + 5$$

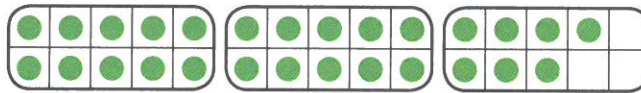
	.
5	2



Complète.

3

	.
2	7




$$27 = 10 + 10 + 7$$

$$27 = 20 + 7$$




	.
2	9



$$29 = 10 + \dots + 9$$

$$29 = 20 + \dots$$

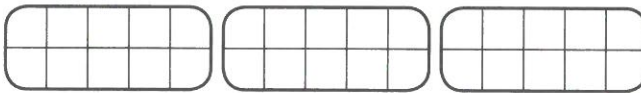
	.
2	6



$$26 = \dots + \dots + \dots$$





$$26 = \dots + 6$$

	.
2	8



$$28 = \dots + \dots + \dots$$

$$28 = \dots + \dots$$



22 Décomposer et recomposer le nombre 10

✓ Je connais les décompositions du nombre 10.

